

Les opérations à 3 chiffres


1. Compte ensemble les différents groupes :



2	+	3	+	4	=	
---	---	---	---	---	---	--



1	+	4	+	3	=	
---	---	---	---	---	---	--



3	+	3	+	2	=	
---	---	---	---	---	---	--




2	+	5	+	1	=	
---	---	---	---	---	---	--



2	+	2	+	3	=	
---	---	---	---	---	---	--

2. Echange la place des chiffres, afin d'obtenir à chaque fois le résultat demandé :



10	=	2	+	3	+	
----	---	---	---	---	---	--


10	=		+		+	
----	---	--	---	--	---	--

10	=		+		+	
----	---	--	---	--	---	--

10	=		+		+	
----	---	--	---	--	---	--

10	=		+		+	
----	---	--	---	--	---	--

10	=		+		+	
----	---	--	---	--	---	--



9	=	2	+	3	+	
---	---	---	---	---	---	--

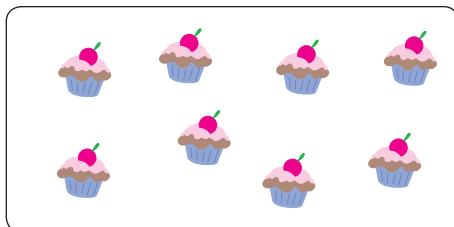
9	=		+		+	
---	---	--	---	--	---	--

9	=		+		+	
---	---	--	---	--	---	--

9	=		+		+	
---	---	--	---	--	---	--

9	=		+		+	
---	---	--	---	--	---	--

9	=		+		+	
---	---	--	---	--	---	--



8	=	2	+	3	+	
---	---	---	---	---	---	--

8	=		+		+	
---	---	--	---	--	---	--

8	=		+		+	
---	---	--	---	--	---	--

8	=		+		+	
---	---	--	---	--	---	--

8	=		+		+	
---	---	--	---	--	---	--

8	=		+		+	
---	---	--	---	--	---	--