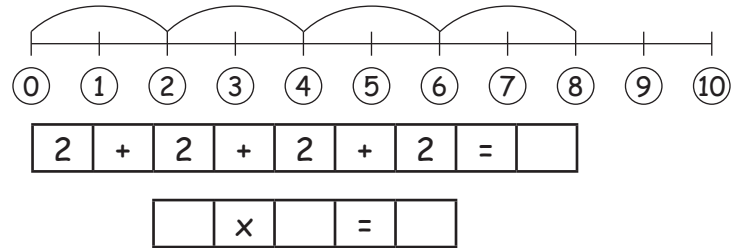
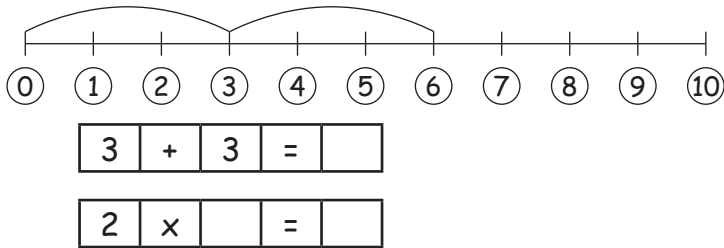


Les chiffres jusqu'à 10

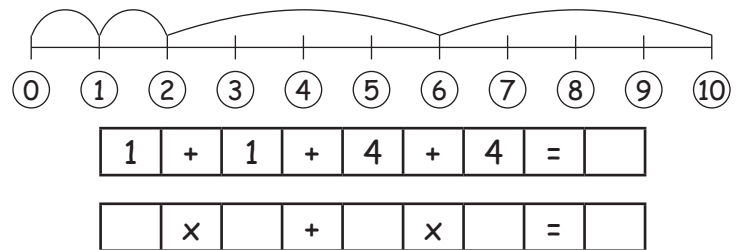
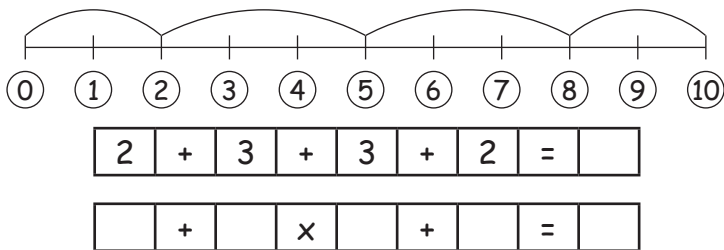
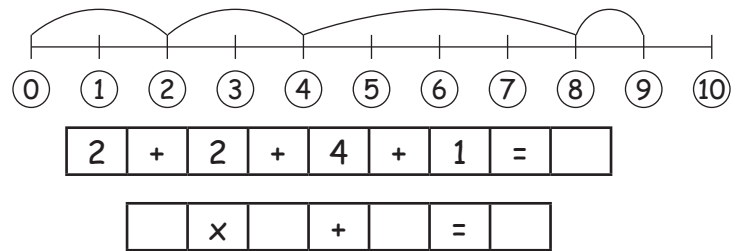
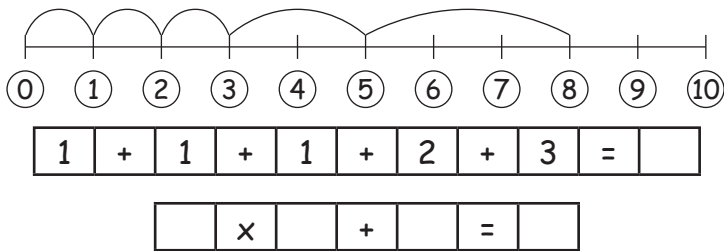
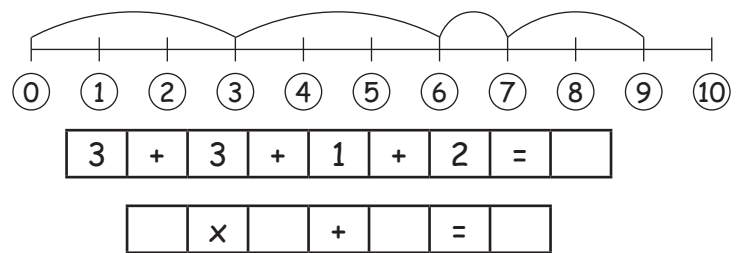
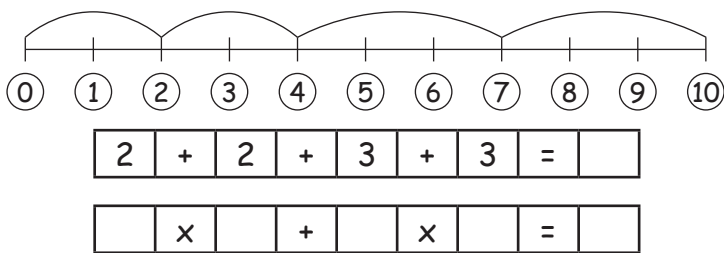


1. Transforme les additions en multiplication.

Aide-toi de l'échelle des chiffres !



2. Combiner les additions et les multiplications :



3. D'autres exercices :

Fais les calculs et, parmi les solutions, trouve l'opération ayant le même résultat.

2 x 3 + 1 =

3 x 3 - 5 =

4 x 1 + 2 =

5 x 2 - 8 =

2 x 2 + 1 =

x + =

x - =

x + =

x - =

x + =

3 x 2 - 4 =

3 x 3 - 4 =

2 x 5 - 6 =

4 x 2 - 1 =

2 x 4 - 2 =