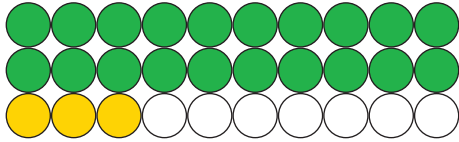


## Les chiffres jusqu'à 30

### 1. Combien manque-t-il pour arriver à 30 ?

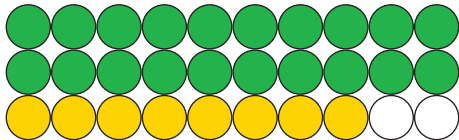
Compte les boules et, comme sur l'exemple, complète pour arriver à 30.



vingt-trois

D	U
2	3

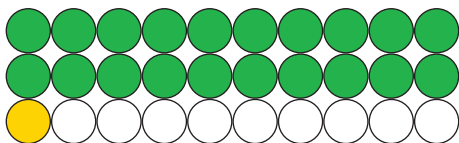
23	+	7	=	30
----	---	---	---	----



vingt-huit

D	U

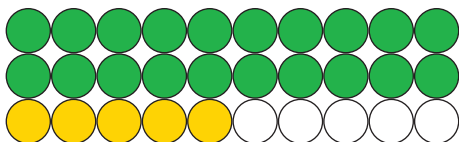
	+		=	30
--	---	--	---	----



vingt-et-un

D	U

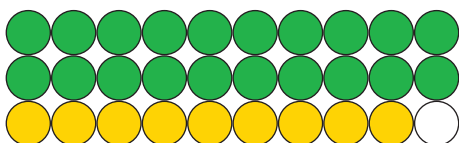
	+		=	30
--	---	--	---	----



vingt-cinq

D	U

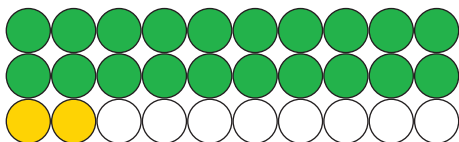
	+		=	30
--	---	--	---	----



vingt-neuf

D	U

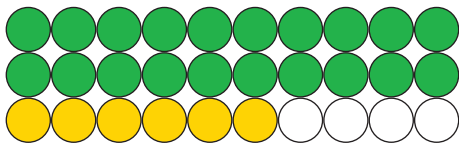
	+		=	30
--	---	--	---	----



vingt-deux

D	U

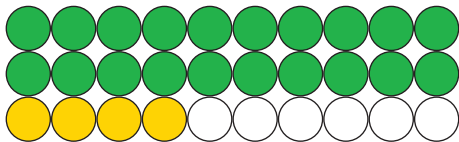
	+		=	30
--	---	--	---	----



vingt-six

D	U

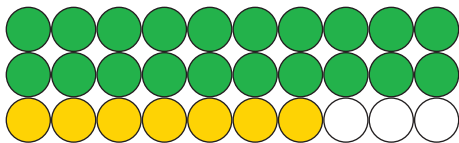
	+		=	30
--	---	--	---	----



vingt-quatre

D	U

	+		=	30
--	---	--	---	----



vingt-sept

D	U

	+		=	30
--	---	--	---	----

### 2. Complète les chiffres manquants :

